

Grace Academy, Dehradun

Name _____

Placement Assessment - Class VI

Date _____

SAMPLE PAPER

English

Maximum Marks: 50

Marks Obtained _____

Q1. Read the passage carefully then answer the following questions below.

Water is one of the most precious gifts of nature, but it is unfortunate that we do not understand its worth and over-exploit this resource for our selfish purposes. It is a matter of serious attention that water must be conserved at all costs. We need water for daily use at home and for agriculture. Drinking water is however limited as we get it mainly from the clouds and glaciers. If this resource is used wisely, then there will be no problem. But unfortunately, it is being over-exploited. Our ever-increasing population has created scarcity of water. It is predicted that by the year 2025, nearly two billion people will live in absolute water scarcity. This is a signal to be cautious enough in the use of water. Every drop of water is precious and it must not go in vain. Water shortage is a grim reality for the cities as well as villages. We need to wake up to it now than be sorry later. We must conserve water in ponds and tanks. We should try our best to use water cautiously. If we continue to use it recklessly, we will have to face dire consequences. By saving water, we will save ourselves.

1. Why is water the most precious gift of nature? (1)
2. What is the main cause of water scarcity? (1)
3. How do you think we can conserve water? (1)
4. What will be the result of using water carelessly? (1)
5. Give a suitable title to this passage. (1)

Q2. Fill in the blanks using the right choice given in the brackets. (5)

1. Nobody canwhat I tell(hear/here)
2. The house was (made/maid) to work for many hours without rest.
3., you till now? (were/where)
4. Last, she was due to illness. (week, weak)
5.people cannot show theway to success.(ideal/idle)

Q3. Circle the correct article in the sentences given below: (5)

1. I have not got (a, an) watch.
2. I will have (a, an) apple before lunch.
3. We enjoyed our holidays (the, a) hotel was very nice.
4. Sarah is (a, an) interesting person. You must meet her.
5. Can I ask you (a, an) question?

Q4. Fill in the blanks with to, too and two: (5)

1. I have exactly pair of shoes.
2. The hospital is taking long to help us.
3. We were available perform at the show.
4. I have tell you about my terrible dream.
5. We lost of our best players due to injury.

Q5. Write the antonyms for the following words: (5)

1. Absent

2. Cruel
3. Sweet
4. Bright
5. Beautiful

Q6. Capitalize the proper nouns in the following sentences: (6)

1. We went to see the lincoln memorial when we visited washington, d.c .
2. Yesterday i read a book called black beauty.
3. We're going to new york in july.
4. My dog's name is comet.

Q7. Make meaningful sentences from the words provided by rearranging them: (5)

1. the/their/children/for/exams/are/preparing. The children.....
2. your/please/work/Friday/before/submit. Please submit.....
3. the/wound/an/antiseptic/wash/lotion/with/immediately. Immediately wash
4. woman/a/rich/lives/the/street/across. A rich.....
5. drive/do/so/carelessly/not. Do not.....

Q8. Write a **paragraph** of about 80-100 words on **any one** of the topics. (8)

1. A Visit to a Historical Place
2. The most surprising thing I found in that old house was

Q9. Write a letter to your mother telling her how you saved the life of a drowning child. (6)

.....

Grace Academy, Dehradun

Name _____

Placement Assessment - Class VI

Date _____

SAMPLE PAPER

HINDI

Maximum Marks: 50

Marks Obtained _____

1. दिए गए अपठित गद्यांश को पढ़कर पूछे गए प्रश्नों के उत्तर लिखिए --

शिक्षा का वास्तविक अर्थ और प्रयोजन व्यक्ति को व्यावहारिक बनाना होता है न कि शिक्षित होने के नाम पर अहम् और गर्व का हाथी उसके मन-मस्तिष्क पर बाँध देना। हमारे देश में स्वतंत्रता प्राप्ति के बाद से जो शिक्षा-नीति और पद्धति चली आ रही है, वह करीब डेढ़ सौ साल पुरानी है। इसने एक उत्पादक मशीन का काम किया है, इस बात पर एकदम ध्यान नहीं दिया कि इस देश की अपनी आवश्यकताएँ और सीमाएँ क्या हैं। इस देश के निवासियों को किस प्रकार की व्यावहारिक शिक्षा की आवश्यकता है बस सुशिक्षितों, साक्षरों की एक लंबी पंक्ति इस देश में खड़ी कर दी, जो किसी दफ्तर में क्लर्क बनने का सपना देख सकते हैं।

क. शिक्षा का मुख्य उद्देश्य क्या है ?

[2]

ख. हमारी देश की शिक्षा नीति कितनी पुरानी है ?

[2]

ग. अहम् का क्या अर्थ है ?

[2]

घ. वर्तमान शिक्षा पद्धति के रहते व्यक्ति क्या सपना देख सकता है ?

[2]

ड गद्यांश के लिए उचित शीर्षक चुनिए-

[2]

1. शिक्षा की सीमा 2. देश 3. शिक्षा का उद्देश्य 4. शिक्षा का राज

2. भाषा के कितने रूप हैं:

[2]

3. वाद-विवाद, वार्तालाप, काव्य पाठ किस के उदाहरण हैं 1

1. मौखिक भाषा का 2. संकेत भाषा 3. लिखित भाषा

[2]

4. वह भाषा जो बालक अपने परिवार से सीखता है 1

[2]

1. राष्ट्र भाषा 2. मातृ भाषा 3. ग्रामीण भाषा

5. अ से अः तक क्या कहलाते हैं

1. व्यंजन 2. स्वर 3. ईकाइ

[2]

6. हिंदी व पंजाबी की लिपि कौन-कौन सी हैं

[2]

1. देवनागरी, गुरुमुखी 2. देवनागरी, नेपाली 3. रोमन, गुरुमुखी

7. हिंदी वर्णमाला में कुल कितने व्यंजन होते हैं 1

[2]

1. 25 2. 33 3. 35 4. 37

8. दिए गए मुहावरों के सही अर्थ छाँटिए-

1. मैदान मारना-

[1]

क. मैदान साफ करना,

ख. विजय प्राप्त करना,

ग. मैदान में पत्थर मारना.

2. हाथ के तोते उड़ना

[1]

- क. हाथ से तोता उड़ना ख. तोते उड़ना ग. होश उड़ना
3. काला अक्षर भैस बराबर [1]
- क. अनपढ़ होना ख. काले अक्षर लिखना ग. भैस को पढ़ना
9. दिए गए शब्दों के सही विलोम छाँटिए
- आदर- सम्मान, असम्मान, अनादर [1]
- आलस्य- चालाक, स्फूर्ति, सुस्त [1]
- आसान- समान, समान्तर, कठिन [1]
10. दिए गए शब्दों की सही भाववाचक संज्ञा शब्द छाँटिए
- मित्र- दोस्त, सखा, मित्रता [1]
- सफ़ेद- श्वेत, उजला, सफ़ेदी [1]
- सुंदर- बदसूरत, सूरत, सुंदरता [1]
- भक्त- भक्तगण, पूजा, भक्ति [1]
11. दिए गए शब्दों की सही वचन छाँटिए:- 2
- पत्नी- पत्नीयाँ, पत्ते, पत्तियाँ [1]
- मछलियाँ- मछिल, मछलि, मछली [1]
12. मित्र को परीक्षा में सफलता के लिए बधाई -पत्र लिखिए। [8]
13. किसी एक विषय पर 50 से 60 शब्दों का एक अनुच्छेद लिखिए [8]

Grace Academy, Dehradun
Placement Assessment - Class VI **Date _____**
SAMPLE PAPER
Mathematics

Maximum Marks: 50

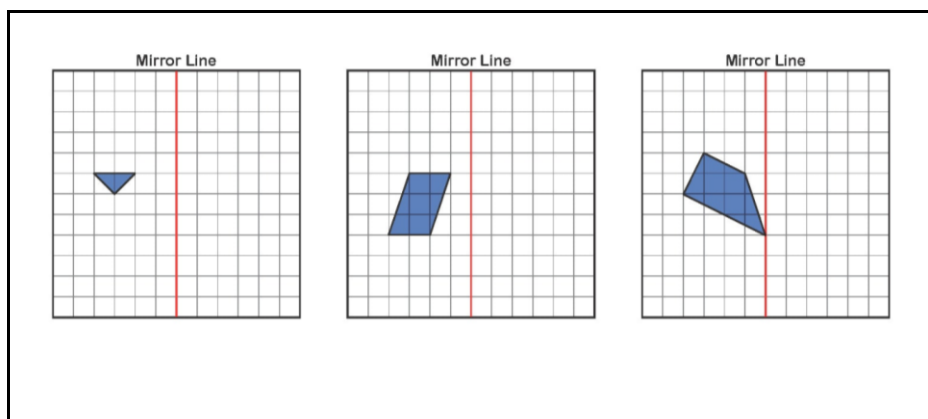
Marks Obtained _____

SECTION A [1X5=5 marks]

- Q1. Write the smallest 7 digit number.
Q2. $0.2 + 0.002 + 0.0002 = ?$
Q3. A bottle can store 1.23L of water. This is the same as _____ mL of water.
Q4. An angle whose measure is 90 degrees is called a _____ angle.
Q5. Draw a triangle having all the sides equal.

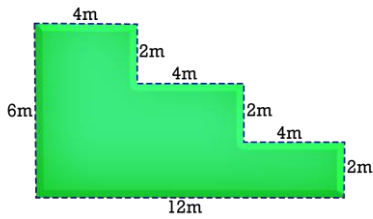
SECTION B [3X5=15 marks]

- Q6. A factory produced 15,12,815 pens in the first year. In the next year it produced 21,18,516 pens. What is the total production?
Q7. Add: $\frac{23}{6} + \frac{4}{3} + \frac{1}{18}$
Q8. Solve: $84 - 4 \text{ of } (32 - 8) + 8 \times 2$
Q9. Find the HCF of 135 and 225 using the prime factorisation method.
Q10. Copy and complete the mirror image of the figures:



SECTION C [5X6=30 marks]

Q11. a)



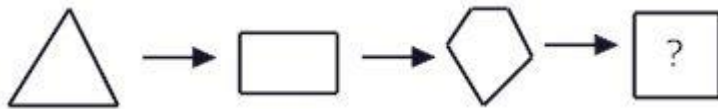
Find the perimeter of the given figure?

b) The area of a rectangle having length 2 m and breadth 35 cm = ?

Q12. a) Arrange in ascending order:

0.402, 0.42, 0.375, 1.2, 0.85

b) What comes next?



Q13. Draw a tally marks chart, for the following data:

Marks scored by 25 students of class 5 are:

55, 56, 56, 54, 57, 57, 56, 55, 55, 56, 56, 57, 55, 56, 57, 55, 56, 56, 54, 56, 55, 54, 57, 57 and 55.

Q14. a) Ronald spent Rs 35.75 for a book and Rs 42.85 for the stationery. Calculate the total amount of money spent by him.

b) Find the next number in pattern.



Q15. Find the LCM of 16, 84, 44 and 26.

Q16. The total capacity of a water tank is 2000 liters. It is filled with 1356 liters 40 ml of water. Find the volume of water required to fill the tank?

Grace Academy, Dehradun
Placement Assessment - Class VI
SAMPLE PAPER
SCIENCE

Name _____ Date _____

Maximum Marks: 50

Marks Obtained _____

SECTION A (10 QUESTIONS OF 1 MARK EACH) 10 Marks

1. Who has invented Velcro?
2. From where do we get crude oil?
3. Why doesn't sea water not fall off?
4. Name one insectivorous plant that traps and eats insects.
5. Who was the first man to walk on the moon?
6. Write the full form of CNG.
7. Name the instrument used to listen to the heartbeat.
8. For how many hours does the food remain in stomach?
9. How can we detect that the person is suffering from malaria?
10. Name one national park of Uttarakhand.

SECTION B (5 QUESTIONS OF 2 MARK EACH) 10 Marks

1. How does a leaf make food for the plant?
2. How do mosquitoes detect humans?
3. Why is the Dead Sea called so?
4. How are snakes friends of the farmers?
5. Why all seeds cannot be dispersed by wind?

SECTION C (5 QUESTIONS OF 3 MARK EACH) 15 Marks

1. Objects weigh less on the moon than they do on the earth. Why?
2. From where do we get petroleum and how is it formed?

3. Name two seeds which are dispersed by wind, water and animals.
4. Why do people blow on the spectacles before cleaning it?
5. Can human beings also be a threat to animals? How?

SECTION D (3 QUESTIONS OF 5 MARK EACH) 15 Marks

1. Describe about the amazing super sense found in tigers.
2. Digestion begins in the mouth. How would you explain this.
3. Suggest some ways to save petrol.